

Navrachana University
SEDA
End-Semester Examination November 2017
FY Semester I
History and Theory I – HS 161
B.Arch/B.Design/B.LAD

Date: 24/11/17
Time: 10:30am to 1:30pm

Marks: 80

Instructions:

- Students may carry handwritten notes for the exam
- Photocopies/books or any other printed matter is not permitted
- Attached drawings are for reference. Students should not draw on them but must attach them as reference behind tracing

Q.1. Answer any three of the following questions:

- i. Describe three different kinds of houses of Roman civilization through sketches. (10 marks)
- ii. Compare architecture of the Egyptian and Greek civilization in terms of geography and settlement (water/landform). (10 marks)
- iii. How did directions (north-south, east-west) become an important factor in architecture of the Egyptian civilization? (10 marks)
- iv. Explain any two of the following building types through sketches: (10 marks)
 - a) Stoa
 - b) Greek agora
 - c) Roman forum
 - d) Theatre (Greek or Roman)
 - e) Hippodrome/Circus
- v. Explain the evolution of pyramids through sketches. (10 marks)
- vi. Egypt had monarchy and Greece was a democracy. It is connected with the geography or resources of the place. How? (10 marks)

Q.2. Discuss and explain with sketches (plans/sections/views) any one prehistoric structure/building in terms of the following: (20 marks)

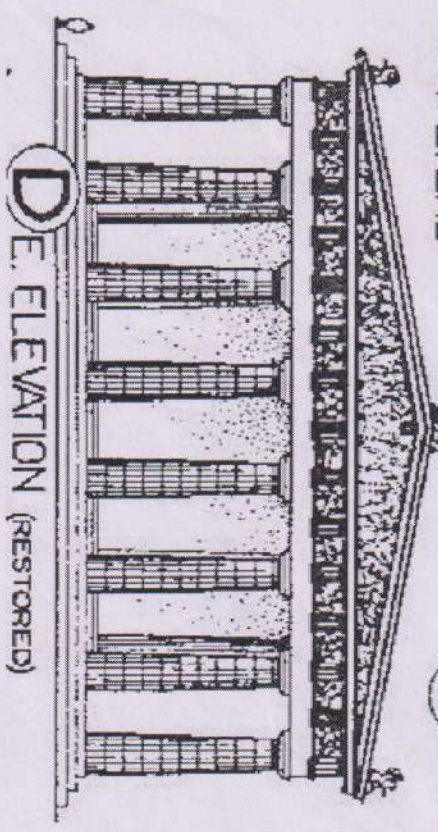
- a) Location and setting
- b) Purpose/function
- c) Material and construction technique

Q.3. Compare the temple of Edfu (Egyptian) and the Parthenon (Greek) in terms of the following aspects: (30 marks)

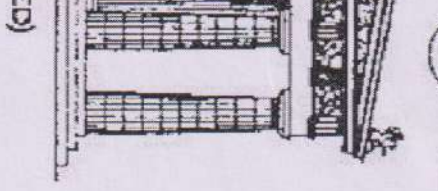
- a) Symmetry and axis
- b) Hierarchy
- c) Introvert/extrovert

-----End of Question Paper-----

A P.E. END (RESTORED)




B E. FACADE (RESTORED)



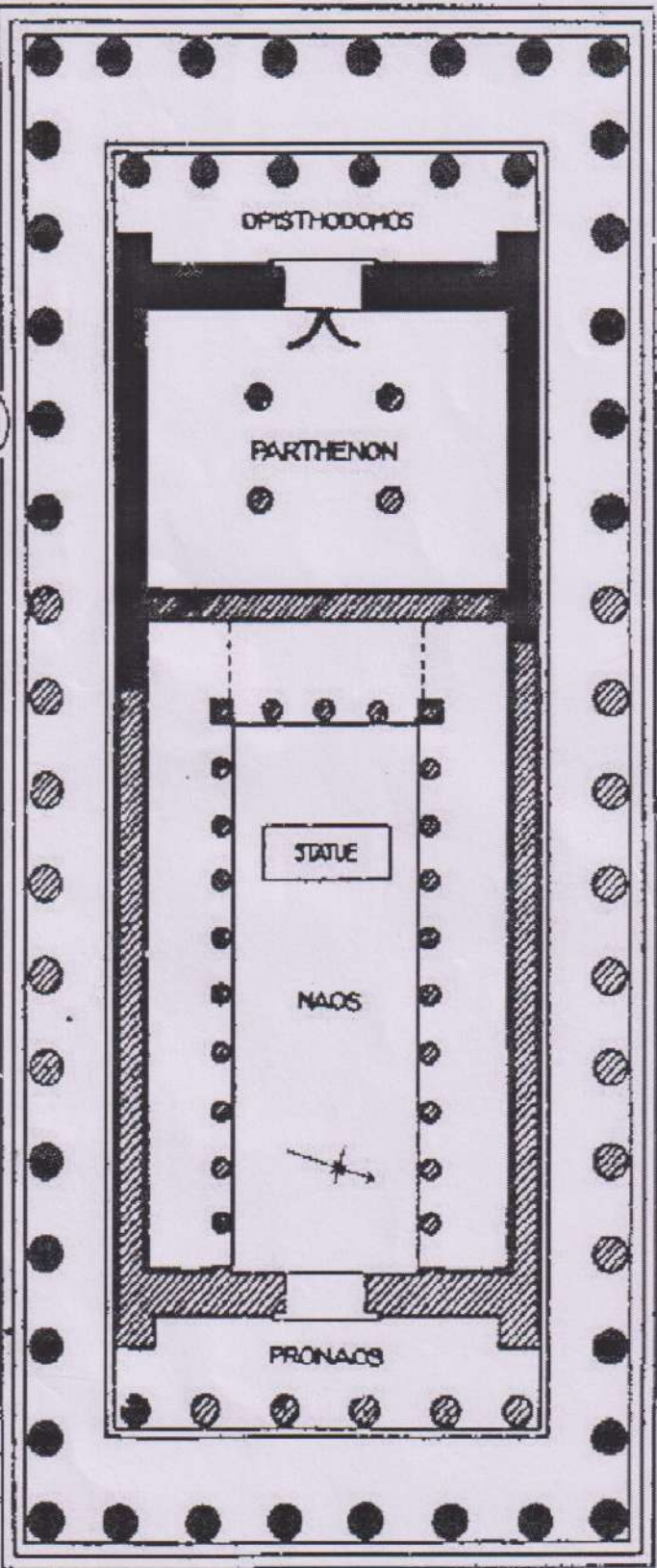
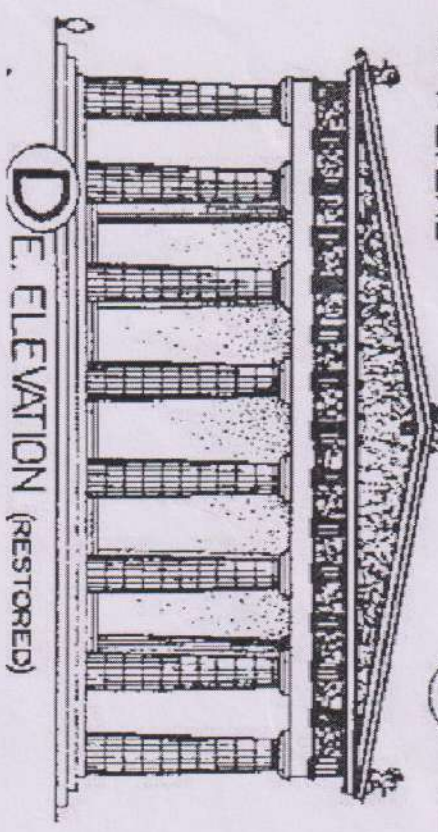
C N.W. ANGLE (RESTORED)




D HALF TRANSVERSE SECTNS. THROUGH NAOS -> THIRD PARTHENON



E E. ELEVATION (RESTORED)



F PLAN (RESTORED)



Parthenon, Athens

Temple of Edfu, Egypt

